



Geography

Magnificent Mountains

Mountain Ranges



Aim

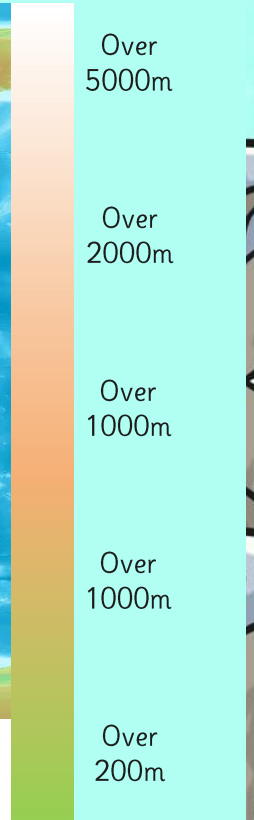
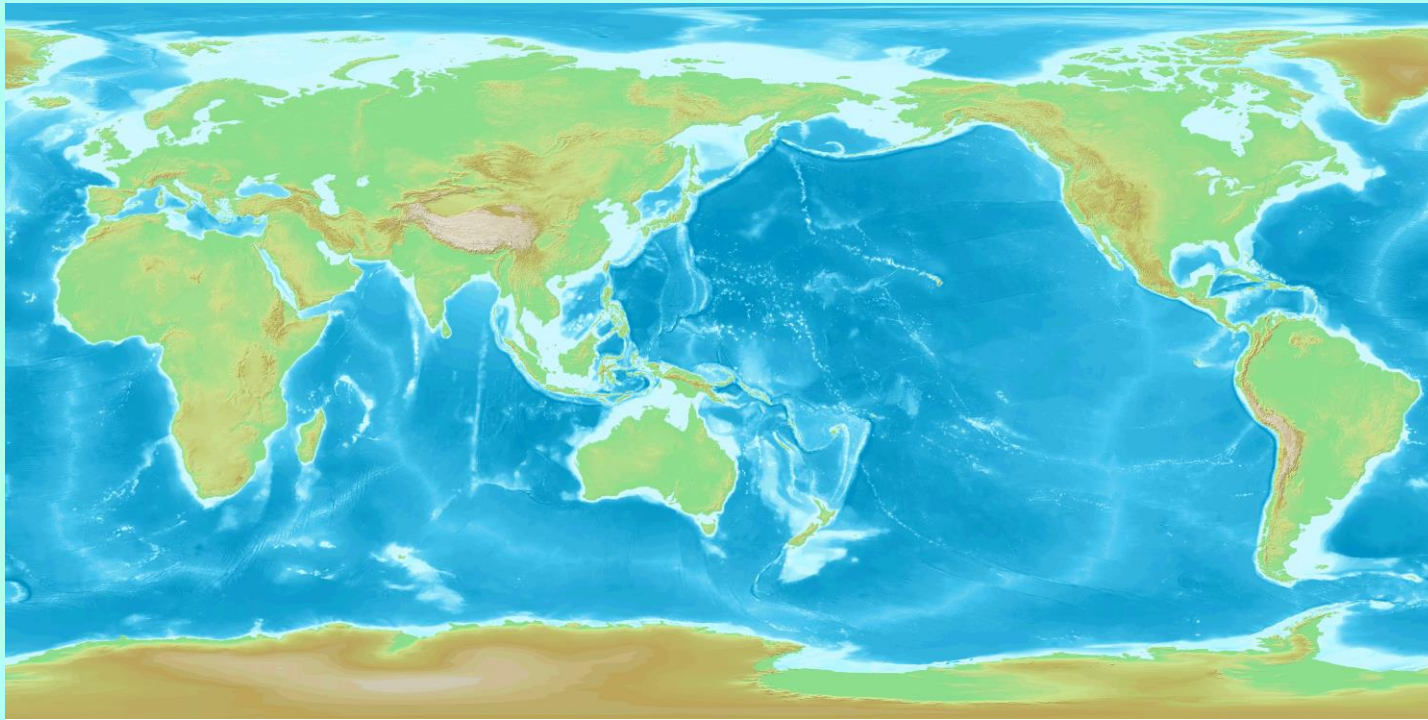
- I can use a map to find countries and their key features.
- I can locate key mountain ranges of the world.

Success Criteria

- I can use a legend to find areas of higher ground on a map.
- I can tell you the country a mountain range is found in.

- I can use the index in an atlas to find mountains.
- I can find the height of a peak on a map.

Using the Legend



Do you know the names of any of the highest areas?

What Is a Mountain?



How would you explain to someone what a mountain is?

When does a hill become a mountain?


A mountain is usually defined as a part of the landscape with steep slopes that rise over 300m.

Some geographers define a mountain as a summit of at least 600m high.

Some mountains are found in groups called ranges, others are isolated summits.



Locating Mountains




Where do you think the highest mountain in the world is located on this map?

It's here!
Do you know its name?



Photo courtesy of Mot the barber and Cessna 206 @flickr.com) - granted under creative commons licence - attribution

Locating Mountains



Use your atlas to locate the world's major mountain ranges and mark them on your map.

★★★

1. What colour are the mountains on your map?

2. How are the highest individual mountains shown on your map?

3. Write a list of the highest five mountains from your map.

--	--	--

4. Fill in the table below using a map to get the names of the highest mountains in the world.

Mountain Area	Continent	Mountain
Andes Mountain		Anconagaga
	North America	
		Mt. Everest
Pyrenees		Pic De Aneto
Alps		
Great Dividing Range	Australasia	
		Mt. Elbrus
Ethiopian Highlands		

★★★

Locating Mountains

Use a map/atlas to label the following mountain ranges in Europe: Pyrenees, Alps, Carpathians, Apennines, Urals

Extension Task:
Research where the highest peaks within Europe are located.

★★★

Locating Mountains

Use a map/atlas to label the following mountain ranges in Europe: Pyrenees, Alps, Carpathians, Apennines, Urals

Extension Task:
Research where the highest peaks within Europe are located.

★

Locating Mountains

Use a map/atlas to label the following mountain ranges in Europe: Pyrenees, Alps, Carpathians, Apennines, Urals, Balkan Mountains.

Extension Task:
Research where the highest peaks within Europe are located.


Geography Year 5

Geography Year 5


Geography Year 5

Geography Year 5 | Magnificent Mountains | Mountain Ranges | Lesson 1

Under the Sea



Mountain Facts



Can you remember how to find a specific location in your atlas?

Look in the index.

Use the page number and coordinates to find the mountain.

Fill in the fact card with more details about the mountain.

A large black-outlined pyramid shape divided into four horizontal sections. The top section is empty. The second section contains the text "Height:". The third section contains the text "Country:". The fourth section contains the text "Continent:". The bottom-left corner of the pyramid has the small text "twinkl.co.uk".

twinkl.co.uk

Aim



- I can use a map to find countries and their key features.
- I can locate key mountain ranges of the world.

Success Criteria

- I can use a legend to find areas of higher ground on a map.
- I can tell you the country a mountain range is found in.
- I can use the index in an atlas to find mountains.
- I can find the height of a peak on a map.

